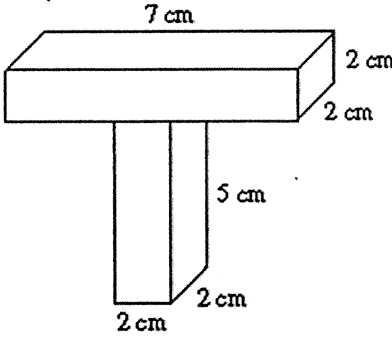




| | Problem 1 | Problem 2 | Gridded Response |
|---------|---|---|---|
| Monday | <p>Find the volume of this shape:</p>  | <p>Simplify</p> $-2(10x - 4)$ | <p><i>Problem 1</i></p>  |
| Tuesday | <p>Convert the following decimals to fractions</p> <p>0.27</p> <p>$0.\overline{4}$</p> <p>5.013</p> | <p>Solve and graph the inequality</p> $\frac{x}{2} - 5 < 4$ | <p><i>Problem 1</i></p>  |

